

Week Two - Possible Resources

Who is Andy Goldsworthy?
Could I make some artwork inspired by him?



Mindfulness

Listen carefully with your eyes closed to any sounds you can hear. After one minute, open your eyes and write down everything you heard.



Sound of the Week



ai Sound Family Phoneme Spotter Story

Sid the Snail

Sid was fed up with being just a snail and decided he wanted to try something new. One day during the month of May he decided to become a weather reporter. He crawled outside leaving a slimy trail behind him. At first it was warm and sunny and he liked being outdoors, but soon the grey clouds came and it began to rain. Just then it started to hail and Sid had to quickly hide inside his shell, where he felt safe. He didn't want to be a weather reporter anymore!

The next day Sid decided he would like to become a postman and deliver people's mail. "I can do this," he thought to himself, it looked easy. He set off carrying a bag full of letters and cards, he slithered along paths and pavements, he even avoided falling down all of the drains. Even though he was slow he was really enjoying himself, reading names and addresses on the front of letters and cards, but suddenly he crawled over a nail which was lying on the ground and was left in a lot of pain. Sid decided he didn't want to be a postman again! What a shame!

Next he decided to become a sailor and made his way down to the bay. He found a pale green boat and climbed inside. When he was out at sea he saw an enormous whale who created a gigantic wave with one almighty great swish of his tail. Sid was covered in water when the wave splashed over his boat. "Time to go," thought Sid.

So Sid went home and decided although he'd had a busy time, he would be most happy just being a garden snail.



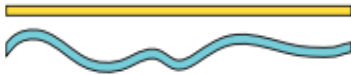
What can you find in the house with the /ai/ sound?
Which spelling do they use?

Year One Maths Mastery Challenges for Measure

LENGTH

Which line is longer?

Explain your reasoning.



A long brick is twice the length of a short brick.

Which is longer:

2 long bricks or 3 short bricks?

3 long bricks or 5 short bricks?



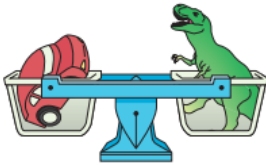
MASS

Here are three items.

Can you sort them from lightest to heaviest by feeling them with your hands?

Give pupils three items that are quite different in mass.

Which is heavier, a toy car or a toy dinosaur?



Here are four items.

Can you sort them from lightest to heaviest using these balance scales?

Give pupils four items that are quite similar in mass.

Look at these balance scales. There are five cars on one side. The doll weighs same as how many cars?



Which toy is heavier?

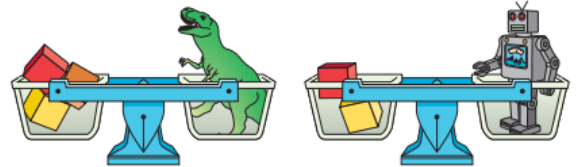


If you added a toy car to the teddy, what would happen to the scales?

Explain your reasoning.

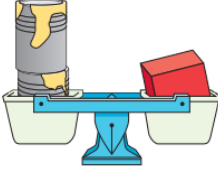


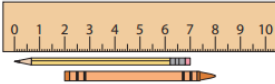
Which of these statements is true?

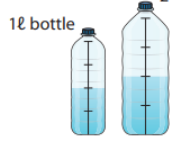



- The dinosaur is lighter than the robot.
- The robot is lighter than the dinosaur.
- The dinosaur and robot weigh the same.



Explain your reasoning.


Year Two Maths Mastery Challenges for Measure

Mastery	Mastery with Greater Depth
<p>This box weighs 10 kg. How much does each tin of paint weigh?</p> 	<p>What is the mass of two red bags? Which is heavier, the red bag or the green bag?</p> <p>Explain your reasoning.</p> 
<p>How long is the pencil?</p>  <p>The pencil is _____ cm long.</p>	<p>How long is the crayon?</p>  <p>The crayon is _____ cm long.</p> <p>How much longer is the crayon than the pencil?</p>

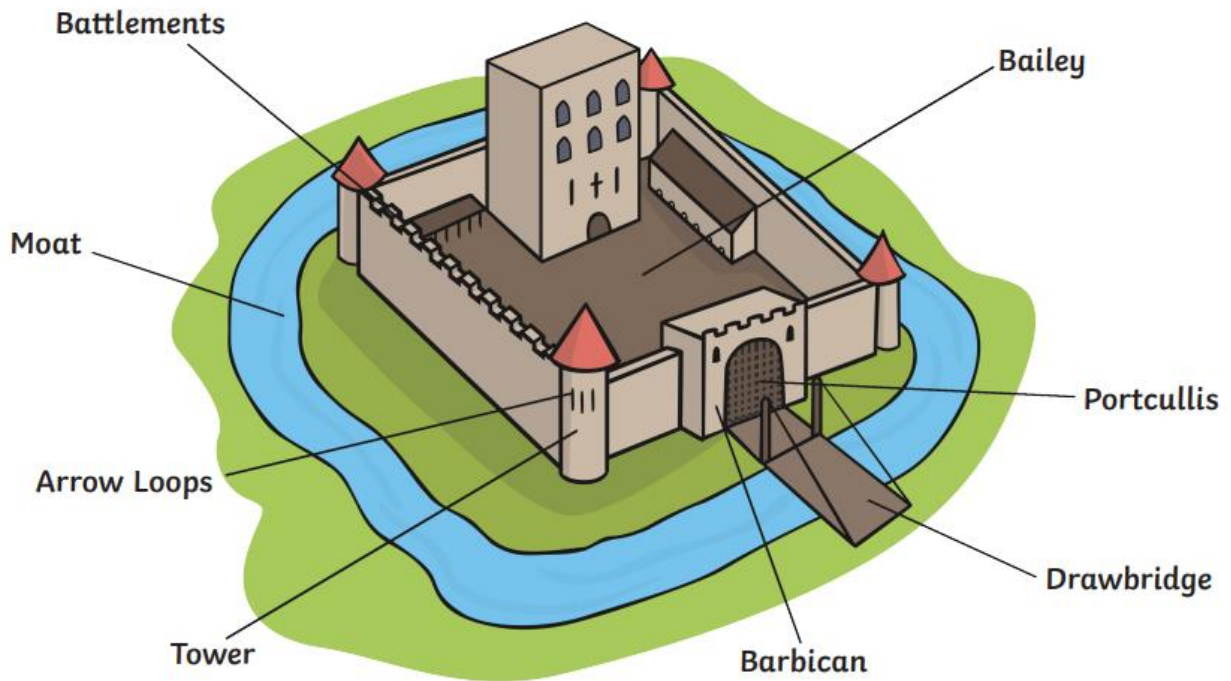
Mastery	Mastery with Greater Depth
<p>Here is a picture of a 1 litre bottle and a 2 litre bottle both with some water in them. What's the same? What's different?</p> <p>1ℓ bottle 2ℓ bottle</p> 	<p>Here is a picture of a 1 litre bottle and a 2 litre bottle with some water in them. What's the same? What's different?</p> <p>1ℓ bottle 2ℓ bottle</p> 
<p>Which of these clock faces shows a time between 5 o'clock and 7 o'clock?</p> 	<p>Jack says, 'There isn't any point in having a minute hand on a clock because I can still tell the time without it.' Do you agree with him? Explain your answer.</p> 

Animal Body Parts Word Mat

twinkl www.twinkl.co.uk



Parts of a Castle



What other parts of a castle are there?